

Doon Public School Bhuj

Worksheet

Chapter 8 Patterns and symmetry

Class: III

Date:- _____

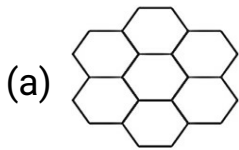
Subject: Maths

Q.1. Do as directed:

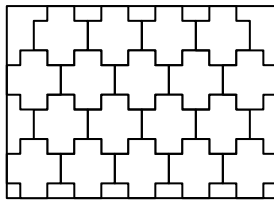
1. Complete the following pattern:

- (a) AA, AB, AC, _____
- (b) AB, ABC, _____
- (c) 11A, 12B, 13C, _____
- (d) 30, 27, 24, 21 _____
- (e) 7500, 7600, 7700, _____
- (f) 400, 390, 380, 370 _____
- (g) 72, 78, 84, _____
- (h) 120, 114, 108, _____

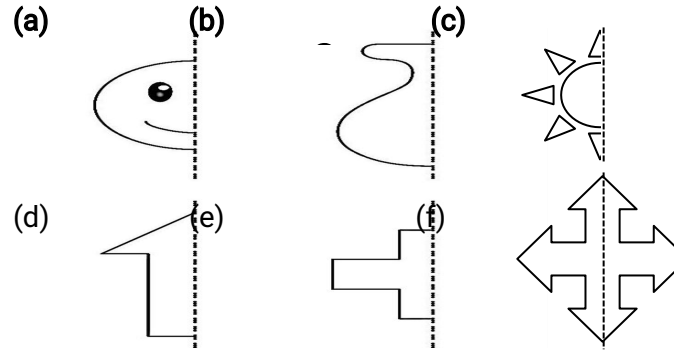
2. color the tiles to make patterns.



(b)



3. Draw the other half to make these images symmetrical. (one has been done)



Answer key

Q.1 (a) AD, AE, AF

(b) ABCD, ABCDE, ABCDEF

(c) 14D, 15E, 16F

(d) 18, 15, 12

(e) 7800, 7900, 8000

(f) 360, 350, 340

(g) 90, 96, 102

(h) 102, 96, 90