

Doon Public School – Bhuj

Class : I

Sub: Maths

Date: 06/07/2020

Dear students,

NOTE: This is your home assignment which you have to complete in your Maths Textbook and


Do the work very neatly with good handwriting in your textbook and

learn the same. Take Care! Stay at Home! Stay Safe!

Pre-Mid Term

Note:


1. Chapter no.3 (Addition upto 10) page numbers -33 to 36 to be done in Maths textbook only.




Addition up to 10

LET'S RECALL

Addition is putting things together.
Look at the picture below and fill in the blank boxes.






Number of dog = 1	Number of girls = 2
Number of cats = 2	Number of boys = 2
Total number of animals = 3	Total number of children = 4



Get Set

Reema's necklace gets broken. She strings the separated beads and adds a few more beads to it. Help her by drawing one bead at each stage. Then count and fill in the boxes.

	and 1 more	is	<input type="text" value="5"/>
	and 1 more	is	<input type="text" value="6"/>
	and 1 more	is	<input type="text" value="7"/>
	and 1 more	is	<input type="text" value="8"/>
	and 1 more	is	<input type="text" value="9"/>






There were beads in the broken necklace.

Reema added more beads to it.

Then there were beads.

MATHS signs
plus '+' means to 'Add'.


Adding 1

	+		=	
3 trees		1 tree		4 trees
3	+	1	=	4


When we add 1 to a number, the answer is the number just after.

1. Count and fill in the boxes. One has been done for you.

a.  and 1 more  is ; $1 + 1 =$



b.  and 1 more  is ; $7 + 1 =$

c.  and 1 more  is ; $3 + 1 =$



d.  and 1 more  is ; $6 + 1 =$

e.  and 1 more  is ; $4 + 1 =$

f.  and 1 more  is ; $2 + 1 =$

g.  and 1 more  is ; $8 + 1 =$

Adding Zero

 + 0 = 
 5 raspberries + 0 = 5 raspberries
 5 + 0 = 5

When we add zero to a number, the answer is the number itself.

1. Fill in the boxes. One has been done for you.

a. + = b. + =

c. + = d. + =



Addition on the Number Strip



Starting from 5, go two steps forward. Where do you find yourself?
You will be at 7. Hence,

$$5 + 2 = 7$$

Practice Coach



1. Add the given numbers on the number strip. One has been done for you.

